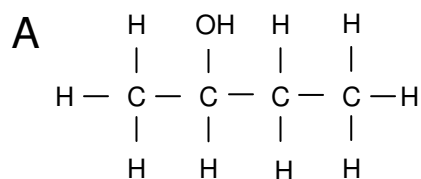


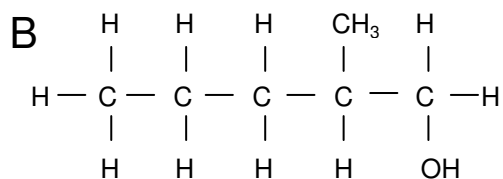
NAMING ALCOHOLS

Name each of the alcohols shown below using IUPAC rules. Classify each of the alcohols as primary, secondary or tertiary.



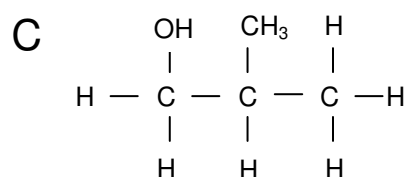
Name _____

Class _____



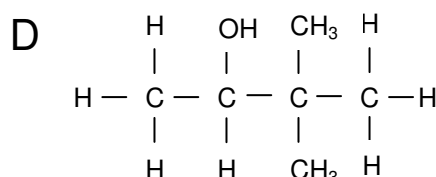
Name _____

Class _____



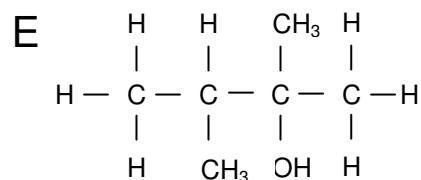
Name _____

Class _____



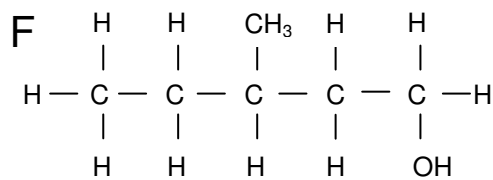
Name _____

Class _____



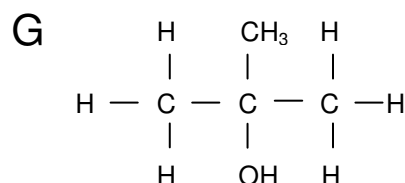
Name _____

Class _____



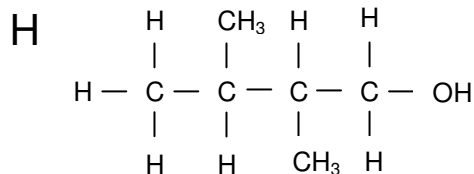
Name _____

Class _____



Name _____

Class _____



Name _____

Class _____